



INDIAN SCHOOL AL WADI AL KABIR
DEPARTMENT OF MATHEMATICS (2023- 2024)

TOPIC: ADDITION (NUMBER LINE)

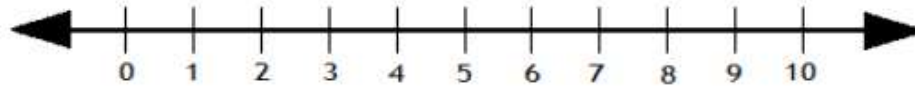
WORKSHEET - 1

RESOURCE PERSON: Ms. Tresa Kumar

NAME: _____ CLASS: I SEC: _____ DATE: _____

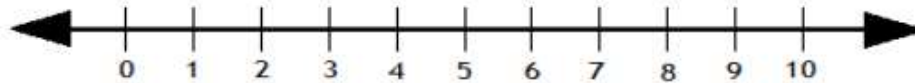
I. Use the number line to add the following numbers.
(0- 10)

1.



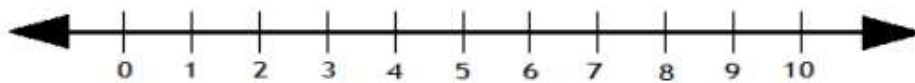
$$1 + 5 = \square$$

2.



$$2 + 8 = \square$$

3.



$$1 + 4 = \square$$

4.



$$2 + 6 = \square$$



INDIAN SCHOOL AL WADI AL KABIR
DEPARTMENT OF MATHEMATICS (2023- 2024)

TOPIC: ADDITION (NUMBER LINE)

WORKSHEET - 2

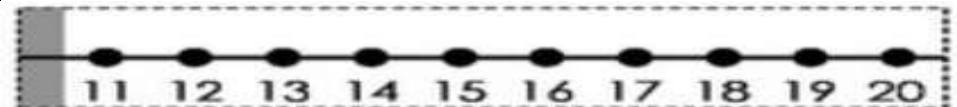
RESOURCE PERSON: Ms. Tresa Kumar

NAME: _____ CLASS: I SEC: _____ DATE: _____

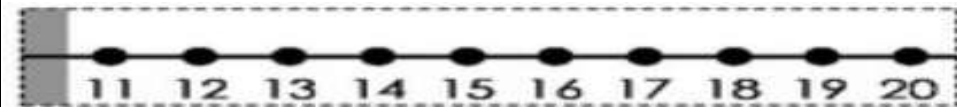
I. Use the number line to add the following numbers.
(11- 20)



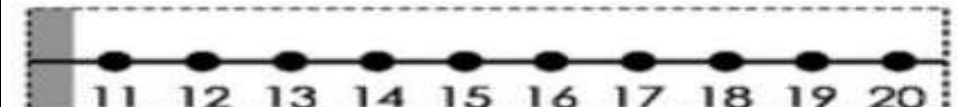
$$15 + 2 = \underline{\hspace{2cm}}$$



$$17 + 2 = \underline{\hspace{2cm}}$$



$$11 + 4 = \underline{\hspace{2cm}}$$



$$14 + 1 = \underline{\hspace{2cm}}$$

